



## Year 3 Autumn Maths Block Assessments: Addition and Subtraction (A)

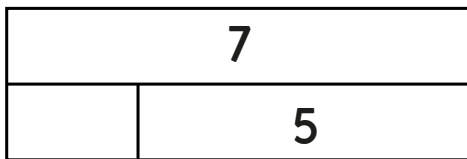
<b>Objective</b>	<b>Before</b> 	<b>After</b> 
I can recall addition and subtraction number facts to 20.		
I can add several numbers efficiently by spotting number facts.		
I can use number facts to add and subtract 1-digit numbers from 2-digit numbers.		
I can subtract by counting up (Frog) and do this to find change from £1.		
I can add 2-digit numbers by partitioning.		

Assessments cover learning in each **Short Block**.

Complete the assessment below after all learning in that block.

## Year 3 Autumn Maths Block Assessments: Addition and Subtraction (A)

**1** Complete the bar models.



2 marks

**2** Find the missing numbers.

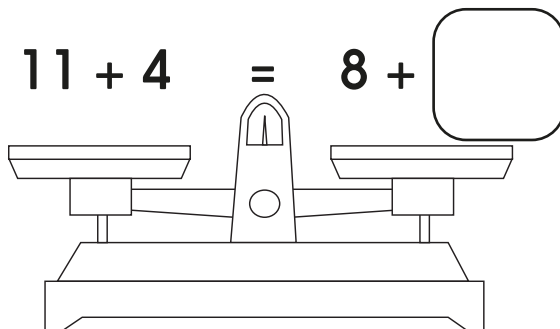
$$7 + \square = 13$$

$$18 - \square = 9$$

$$6 + \square + 5 = 18$$

3 marks

**3** Balance the scales to find each missing number.



$$4 + 5 + 10 = \square + 6$$

$$3 + 8 + \square = 9 + 7$$

3 marks

4

Add the numbers.

$$2 + 9 + 8 = \square$$

$$6 + 3 + 5 = \square$$

$$4 + 7 + 6 + 3 = \square$$

3 marks

5

Add the numbers.

$$53 + 5 = \square$$

$$68 + 7 = \square$$

$$96 + 6 = \square$$


3 marks

**6****Subtract the numbers.**

$79 - 6 = \square$

$42 - 4 = \square$

$103 - 5 = \square$

*3 marks***7****Use Maths Frog to help answer these **subtractions** (draw empty number lines to help).**

$40 - 27 = \square$   

---

$70 - 48 = \square$   

---

$53 - 39 = \square$   

---

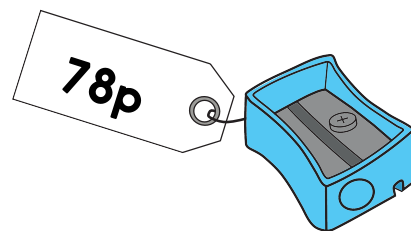
$84 - 47 = \square$



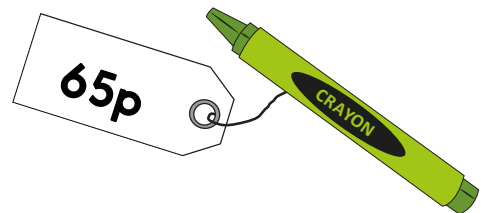
4 marks

8

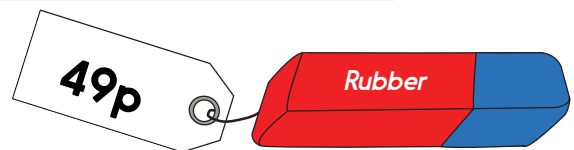
Find the **change** from £1 for each of these items, using Maths Frog to help you count up.




\_\_\_\_\_



\_\_\_\_\_



\_\_\_\_\_



\_\_\_\_\_

4 marks

9

Add each pair of numbers using **partitioning**.

$23 + 14 = \square$





$56 + 22 = \square$

$37 + 25 = \square$

3 marks

10

Use **partitioning** to find the total cost of.



an apple and a banana

an orange and the cherries

2 marks

Total / 30 =

**Year 3 Autumn Maths Block Assessments:**  
Addition and Subtraction (A) - **ANSWERS**

1. 

8	
2	6

7	
2	5

2.  $7 + 6 = 13$   
 $18 - 9 = 9$   
 $6 + 7 + 5 = 18$

3.  $11 + 4 = 8 + 7$   
 $4 + 5 + 10 = 13 + 6$   
 $3 + 8 + 5 = 9 + 7$

4.  $2 + 9 + 8 = 14$   
 $6 + 3 + 5 = 19$   
 $4 + 7 + 6 + 3 = 20$

5.  $53 + 5 = 58$   
 $68 + 7 = 75$   
 $96 + 6 = 102$

6.  $79 - 6 = 73$   
 $42 - 4 = 38$   
 $103 - 5 = 98$

7.  $40 - 27 = 13$   
 $70 - 48 = 22$   
 $53 - 39 = 14$   
 $84 - 47 = 37$

8.  $£1 - 78p = 22p$   
 $£1 - 65p = 35p$   
 $£1 - 49p = 51p$   
 $£1 - 23p = 77p$

9.  $23 + 14 = 37$   
 $56 + 22 = 78$   
 $37 + 25 = 62$

10.  $34p + 53p = 87p$   
 $57p + 36p = 93p$